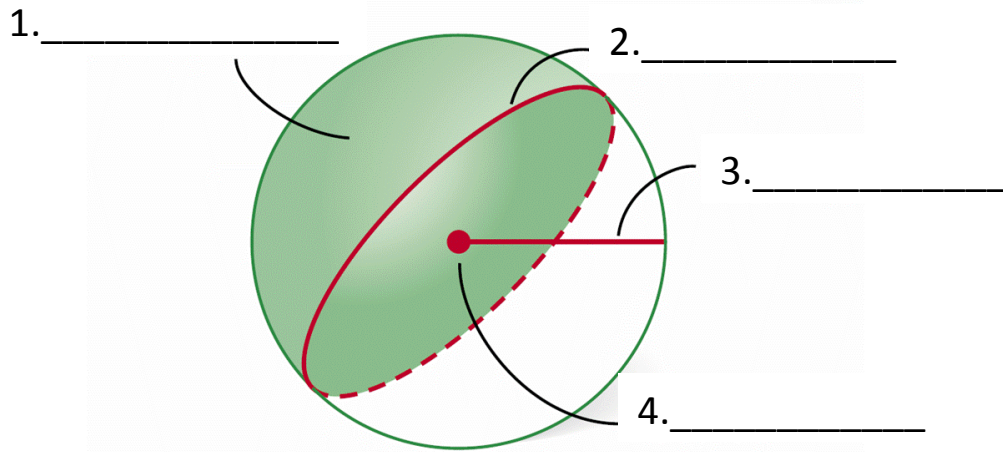


Name: \_\_\_\_\_ Block: \_\_\_\_\_ Date: \_\_\_\_\_

## Section 10-8: Spheres

Sphere: \_\_\_\_\_

Classification:

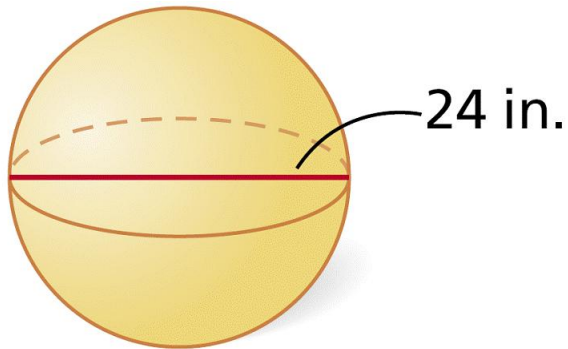


### Spheres

General Formula:

- Surface Area: \_\_\_\_\_
- Volume: \_\_\_\_\_

1.



Total Area	Volume:
Answer _____	Answer _____

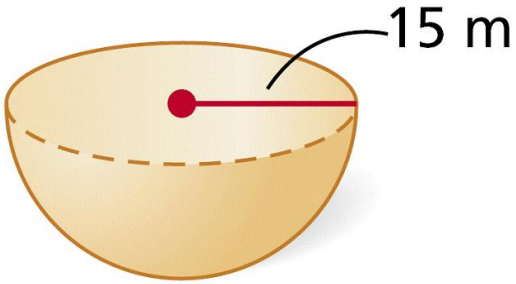
Name: \_\_\_\_\_ Block: \_\_\_\_\_ Date: \_\_\_\_\_

### Hemispheres

General Formula:

- Surface Area: \_\_\_\_\_
- Volume: \_\_\_\_\_

2.



Area of base:  Answer _____	Lateral area:  Answer _____
Total Area:  Answer _____	Volume:  Answer _____