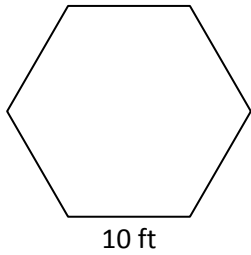


Journal #18:

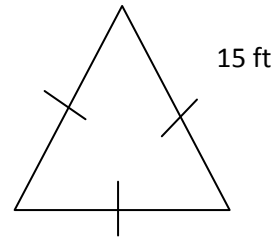
Answer the following questions:

1. Fill in the missing information



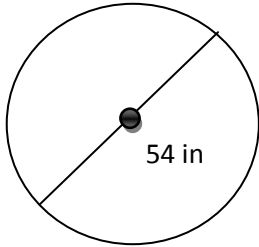
Name: _____
 1 int. angle: _____
 1 ext. angle: _____
 Sum of int. angles: _____
 Sum of ext. angles: _____
 Apothem: _____
 Perimeter: _____
 Area: _____

2. Keep as an Exact Answer!!



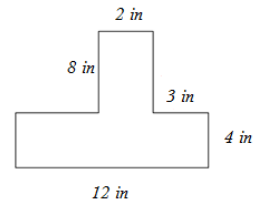
Area= _____

3. Keep answers in terms of π



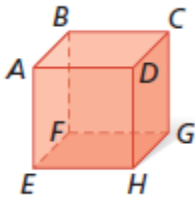
Area= _____
 Circumference= _____

4.

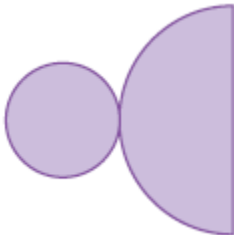


Area= _____
 Perimeter= _____

5. Classify the figure below. Name one vertex, edge, and base.



6. Describe the three-dimensional figure that can be made from the net below.



7. What do you think the term "surface area"