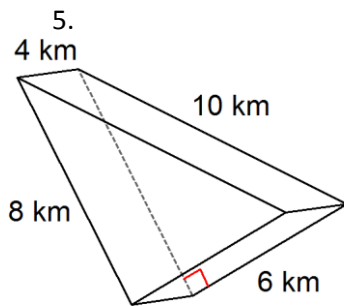


Journal #20:

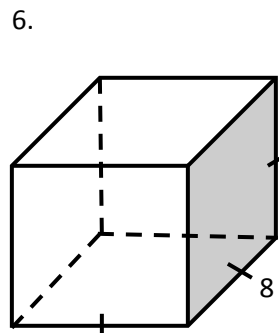
Find the indicated measurement:

1. the radius of $\odot M$ if the diameter is 25 cm.
2. the circumference of $\odot X$ if the radius is 42.5 in.
3. the area of $\odot T$ if the diameter is 26 ft.
4. the circumference of $\odot N$ if the area is $625 \pi \text{ cm}^2$.

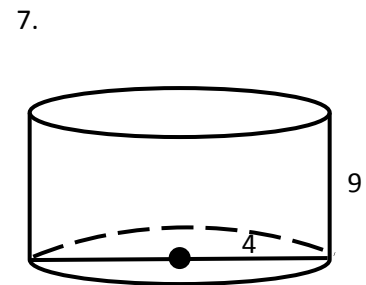
Find the volume and surface area of the following:



Name: _____
 Volume formula: _____
 Volume: _____
 Surface Area: _____



Name: _____
 Volume formula: _____
 Volume: _____
 Surface Area: _____



Name: _____
 Volume formula: _____
 Volume: _____
 Surface Area: _____