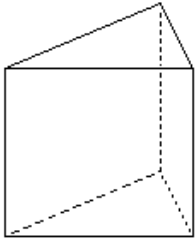


Journal #21 (REVIEW DAY):

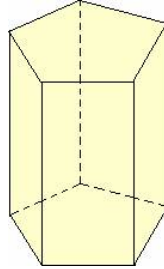
For the following shapes label a vertex, edge, base, and lateral face (state if it does not have one of these components). Finally classify the shape with a proper name.

1.



Name: _____

2.



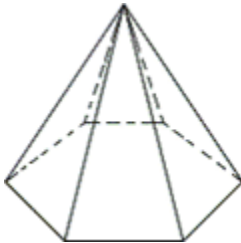
Name: _____

3.



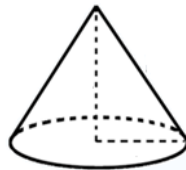
Name: _____

4.



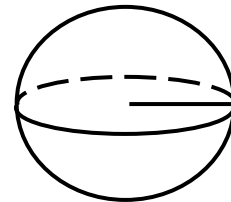
Name: _____

5.



Name: _____

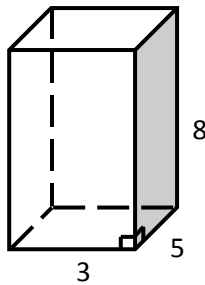
6.



Name: _____

Fill in the table below:

7.



Base Area	Lateral Area
Surface Area	Volume